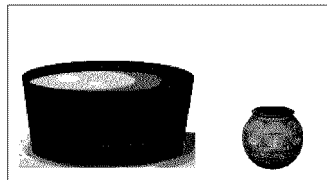


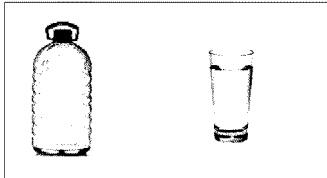


Time: 10 Minutes	Paper Math 2	Total Marks: 10
------------------	--------------	-----------------

4th Month, 3rd Week, 5th Day	Syllabus: Page # 114, 115, 116
------------------------------	--------------------------------

Tick (✓) the container which has more capacity. (10)

جس کی گنجائش زیادہ ہو اس پر (✓) لگائیں۔

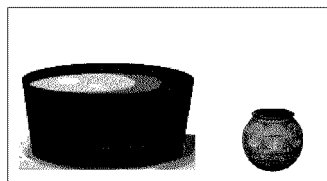


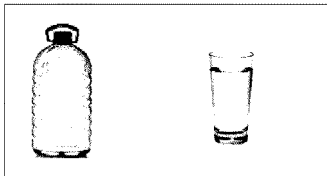


Time: 10 Minutes	Paper Math 2	Total Marks: 10
------------------	--------------	-----------------

4th Month, 3rd Week, 5th Day	Syllabus: Page # 114, 115, 116
------------------------------	--------------------------------

Tick (✓) the container which has more capacity. (10)

جس کی گنجائش زیادہ ہو اس پر (✓) لگائیں۔

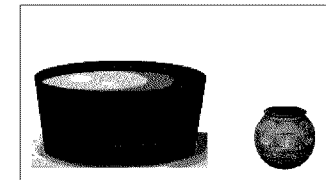


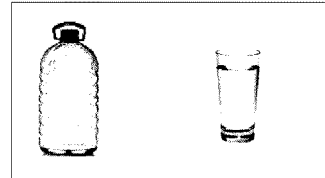


Time: 10 Minutes	Paper Math 2	Total Marks: 10
------------------	--------------	-----------------

4th Month, 3rd Week, 5th Day	Syllabus: Page # 114, 115, 116
------------------------------	--------------------------------

Tick (✓) the container which has more capacity. (10)

جس کی گنجائش زیادہ ہو اس پر (✓) لگائیں۔



Time: 10 Minutes	Paper Math 2	Total Marks: 10
------------------	--------------	-----------------

4th Month, 3rd Week, 5th Day	Syllabus: Page # 114, 115, 116
------------------------------	--------------------------------

Tick (✓) the container which has more capacity. (10)

جس کی گنجائش زیادہ ہو اس پر (✓) لگائیں۔

